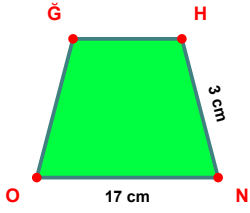
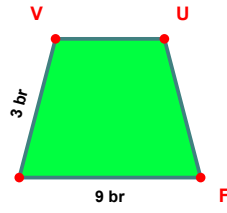


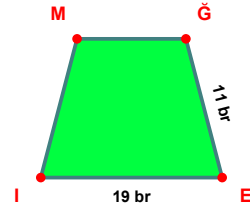
**SORU:** Aşağıdaki şekillerde verilen, kenar uzunlukları farklarını bulunuz.



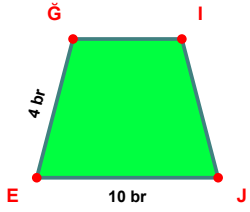
$$|NO| - |HN| = \dots\dots\dots$$



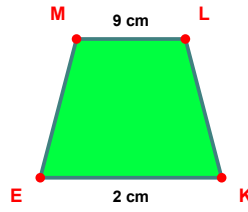
$$|FI| - |VI| = \dots\dots\dots$$



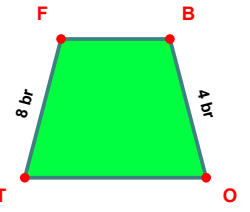
$$|EI| - |GE| = \dots\dots\dots$$



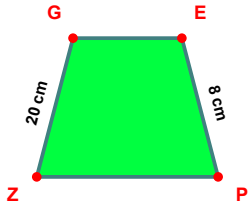
$$|EJ| - |GE| = \dots\dots\dots$$



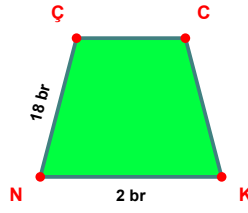
$$|ML| - |KE| = \dots\dots\dots$$



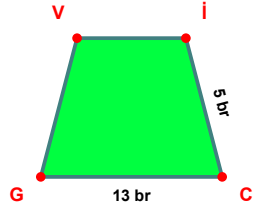
$$|TF| - |BO| = \dots\dots\dots$$



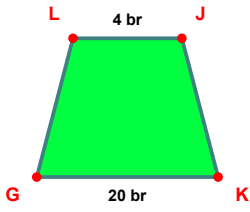
$$|ZG| - |EP| = \dots\dots\dots$$



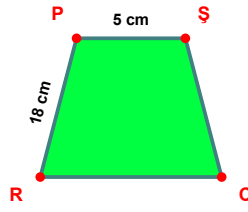
$$|NÇ| - |KN| = \dots\dots\dots$$



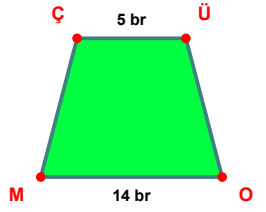
$$|CG| - |İC| = \dots\dots\dots$$



$$|KG| - |LJ| = \dots\dots\dots$$

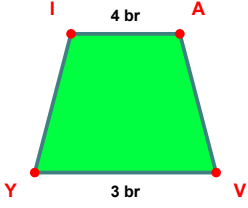


$$|RP| - |PŞ| = \dots\dots\dots$$

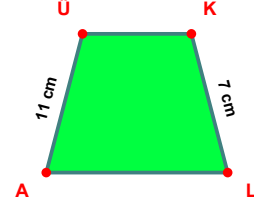


$$|OM| - |ÇÜ| = \dots\dots\dots$$

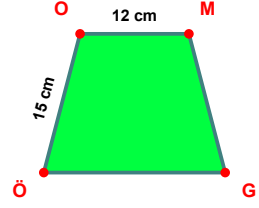
**SORU:** Aşağıdaki şekillerde verilen, kenar uzunlukları farklarını bulunuz.



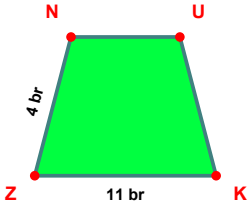
$$|IA| - |YV| = \dots\dots$$



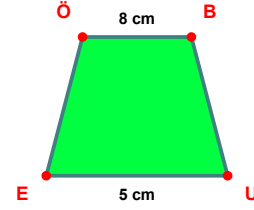
$$|ÜA| - |ÜL| = \dots\dots$$



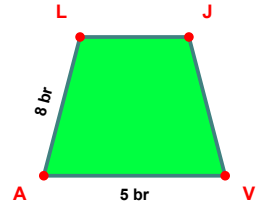
$$|OG| - |OM| = \dots\dots$$



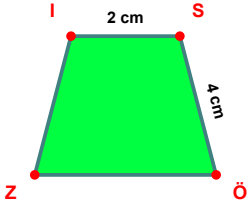
$$|NZ| - |ZK| = \dots\dots$$



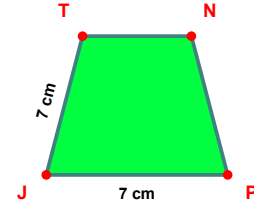
$$|ÖB| - |UE| = \dots\dots$$



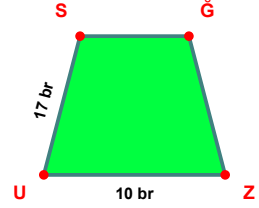
$$|LJ| - |VA| = \dots\dots$$



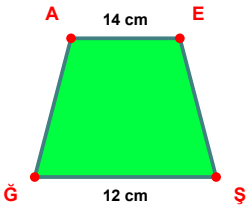
$$|ZÖ| - |IS| = \dots\dots$$



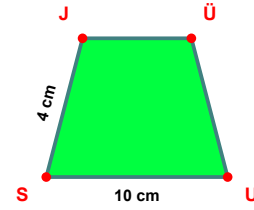
$$|PJ| - |JT| = \dots\dots$$



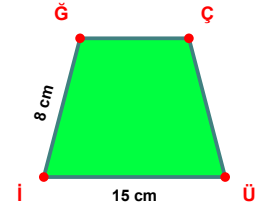
$$|US| - |ZU| = \dots\dots$$



$$|AE| - |ŞĞ| = \dots\dots$$



$$|US| - |SJ| = \dots\dots$$



$$|Üİ| - |İÇ| = \dots\dots$$

SÜREÇ ODAKLI DEĞERLENDİRME ÖLÇEĞİ

Doğru Sayısı: ..... / 24

Öğretmen ilgili kutucuğu işaretler.

Geliştirilmeli (0-8)

İyi (9-14)

Çok İyi (15-20)

Mükemmel (21-24)

☐☐☐☐

Hazırlayan: .....

Bu bölüme sınıfınızın ilgili kazanıma yönelik genel durumuna ilişkin gözlem ve izlenimlerinizi, öğrencilerinizin bu kazanımla ilgili öğrenme eksikliklerini ve bu eksikliklerin giderilmesi amacıyla yaptığınız/yapmayı planladığınız faaliyetleri not edebilirsiniz.

No	Adı - Soyadı	Toplam Puan	Değerlendirme
1			
2			
3			
4			
5			
6			
7			
8			
9			
10			
11			
12			
13			
14			
15			
16			
17			
18			
19			
20			
21			
22			
23			
24			
25			
26			
27			
28			
29			
30			
31			
32			
33			
34			
35			

Hazırlayan: .....